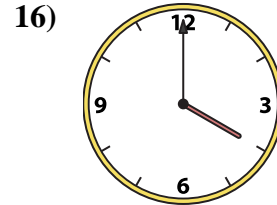
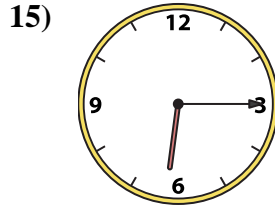
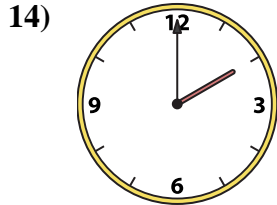
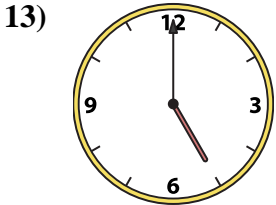
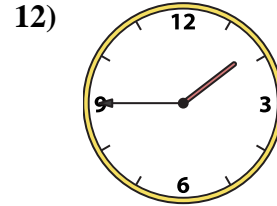
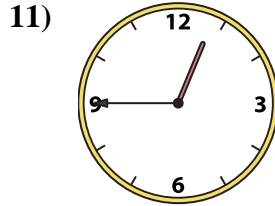
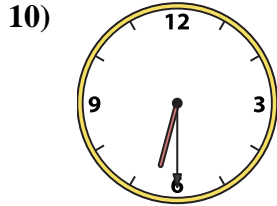

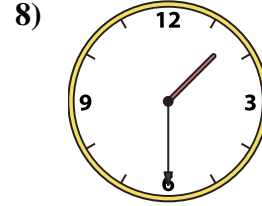
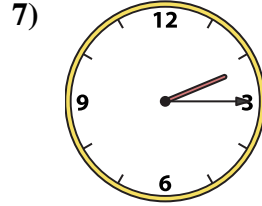
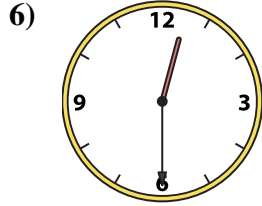

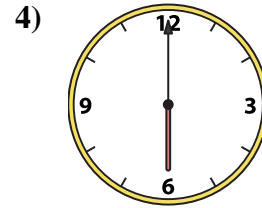
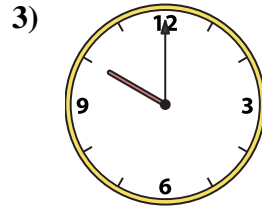
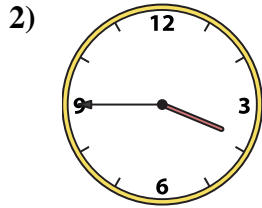
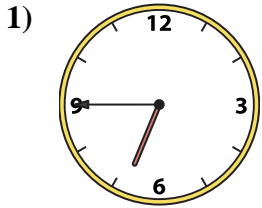




Match the analog clock to the digital clock.

Answers



A. **6:30**

B. **6:15**

C. **1:30**

D. **5:00**

E. **6:00**

F. **6:45**

G. **2:15**

H. **12:45**

I. **11:30**

J. **2:00**

K. **3:45**

L. **12:30**

M. **4:00**

N. **10:00**

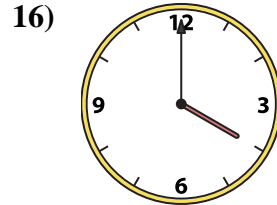
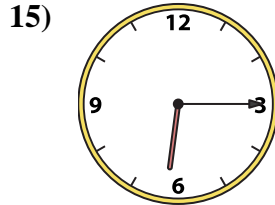
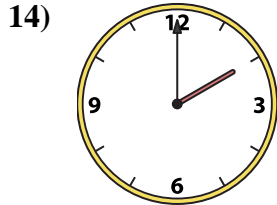
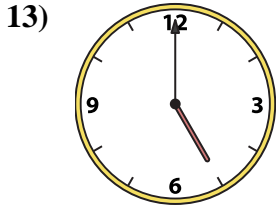
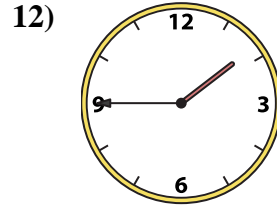
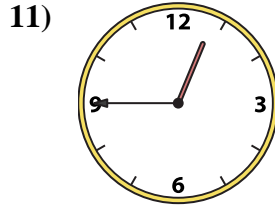
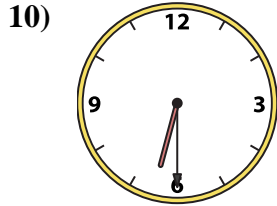
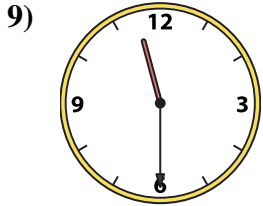
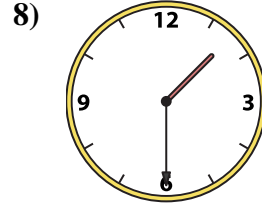

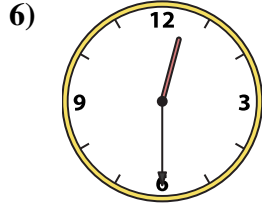
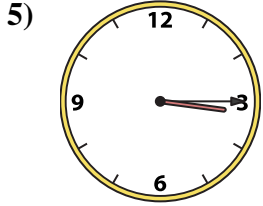
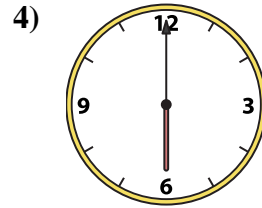
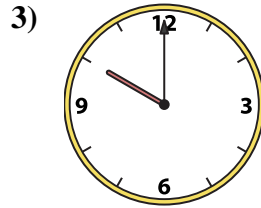
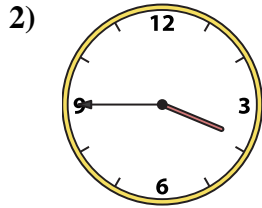
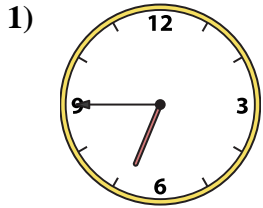
O. **3:15**

P. **1:45**

1. _____
2. _____
3. _____
4. _____
5. _____
6. _____
7. _____
8. _____
9. _____
10. _____
11. _____
12. _____
13. _____
14. _____
15. _____
16. _____



Match the analog clock to the digital clock.



A. **6:30**

B. **6:15**

C. **1:30**

D. **5:00**

E. **6:00**

F. **6:45**

G. **2:15**

H. **12:45**

I. **11:30**

J. **2:00**

K. **3:45**

L. **12:30**

M. **4:00**

N. **10:00**

O. **3:15**

P. **1:45**

Answers

1. **F**

2. **K**

3. **N**

4. **E**

5. **O**

6. **L**

7. **G**

8. **C**

9. **I**

10. **A**

11. **H**

12. **P**

13. **D**

14. **J**

15. **B**

16. **M**